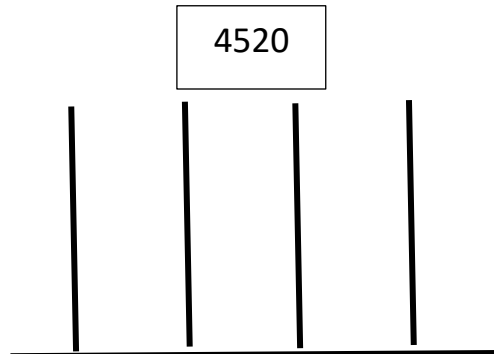
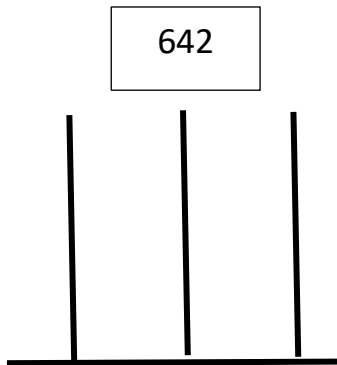


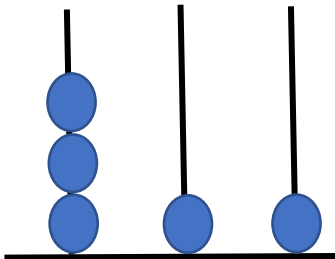
Grade 4 – Mathematics
Topic: Numeration & Notation

Name: _____

1. Represent the following numbers on an abacus.

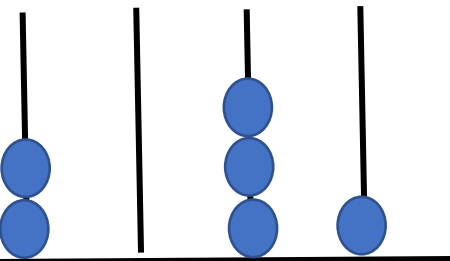


2. Complete.



In figures: _____

In words: _____



In figures: _____

In words: _____

3. Fill in the blanks.

a. 23, 24, 25, _____, _____, _____.

b. 108, 109, 110, _____, _____, _____.

c. 562, 563, 564, _____, _____, _____.

d. 649, 650, _____, 652, _____, 654, _____.

e. 1021, 1022, 1023, _____, _____, _____.
